
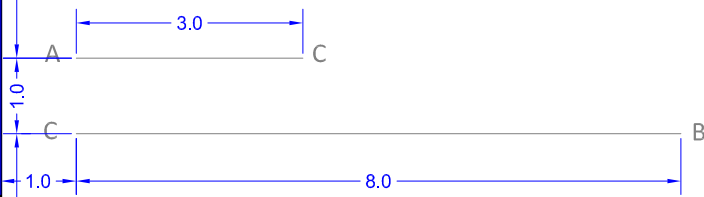



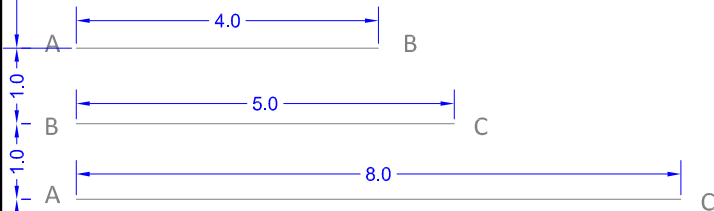
ACTIVITY 1.6:

Imagine that you are an architect and you have to draw this window. Design the triangular pieces

Build a right triangle given the hypotenuse and one of its legs. TIP (2nd Thale's theorem) **E3.4.1**



Activity 2. Build a quadrilateral given two consecutive sides (4 and 5 cm) y its diagonall (8 cm). **E3.5.1**



GROUP:	SURNAMES, FIRSTNAME	DATE:	SHEET: 1.6
2º ESO		VISUAL ARTS: LUIS ZURITA HERRERA	
IES D. Pedro García Aguilera (Moratalla)			